


Clefs


Directions: Read the “Staff, Clefs and Ledger Lines” lesson on www.musictheory.net and complete the following. Answer all questions in pencil.

1. The following clef has two names: 1. _____ 2. _____

Steps to drawing:




Draw 6 of the above clef:



2. The following clef has two names: 1. _____ 2. _____

Steps to drawing:




Draw 6 of the above clef:




3. The following clef has two names: 1. _____ 2. _____

Steps to drawing:




Draw 6 of the above clef:




4. The following clef has two names: 1. _____ 2. _____

Steps to drawing:



Draw 6 of the above clef:



5. Draw a grand staff and label the following:

Treble Clef

Bass Clef

Middle C

G on the Treble Clef

F on the Bass Clef

