











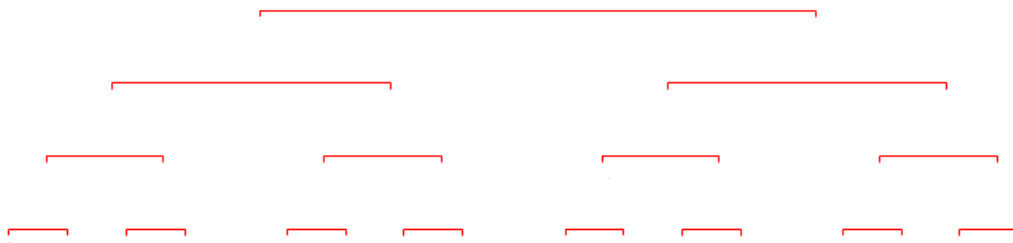
# Note and Rest Durations

Directions: Read the “Note Durations” and “Rest Durations” lessons on [www.musictheory.net](http://www.musictheory.net) and complete the following. Answer all questions in pencil.

Label the following notes and durations:

Note/Rest	Name	Duration in 4/4 Time
 	_____	____ beats
 	_____	____ beats
 	_____	____ beats
 	_____	____ beats
 	_____	____ beats

Draw the note duration chart from [www.musictheory.net](http://www.musictheory.net):



Draw the rest duration chart from [www.musictheory.net](http://www.musictheory.net):

